

Centre No.						Paper Reference					Surname	Initial(s)	
Candidate No.						4	4	0	0	/	3	H	Signature

Paper Reference(s)

4400/3H

London Examinations IGCSE

Mathematics

Paper 3H

Higher Tier

Thursday 11 November 2010 – Morning

Time: 2 hours

Examiner's use only

--	--	--

Team Leader's use only

--	--	--

Materials required for examination

Ruler graduated in centimetres and millimetres, protractor, compasses, pen, HB pencil, eraser, calculator. Tracing paper may be used.

Items included with question papers

Nil

Instructions to Candidates

In the boxes above, write your centre number, candidate number, your surname, initials and signature. Check that you have the correct question paper. Answer ALL the questions. Write your answers in the spaces provided in this question paper. Without sufficient working, correct answers may be awarded no marks. **You must NOT write on the formulae page. Anything you write on the formulae page will gain NO credit.** If you need more space to complete your answer to any question, use additional answer sheets.

Information for Candidates

The marks for individual questions and the parts of questions are shown in round brackets: e.g. (2). There are 21 questions in this question paper. The total mark for this paper is 100. There are 24 pages in this question paper. Any blank pages are indicated. You may use a calculator.

Advice to Candidates

Write your answers neatly and in good English.

This publication may be reproduced only in accordance with Edexcel Limited copyright policy. ©2010 Edexcel Limited.

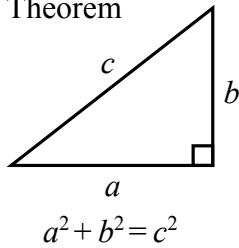
Printer's Log. No.
H37770A
W850/U4400/57570 4/6/6/6



Turn over
edexcel
advancing learning, changing lives

**IGCSE MATHEMATICS 4400
FORMULA SHEET – HIGHER TIER**

Pythagoras' Theorem

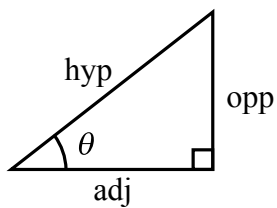
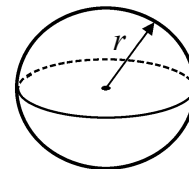
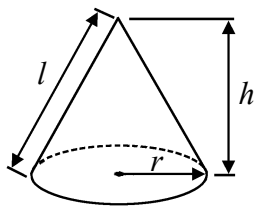


Volume of cone = $\frac{1}{3} \pi r^2 h$

Volume of sphere = $\frac{4}{3} \pi r^3$

Curved surface area of cone = $\pi r l$

Surface area of sphere = $4\pi r^2$



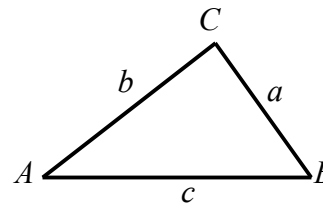
adj = hyp \times cos θ
opp = hyp \times sin θ
opp = adj \times tan θ

or $\sin \theta = \frac{\text{opp}}{\text{hyp}}$

$\cos \theta = \frac{\text{adj}}{\text{hyp}}$

$\tan \theta = \frac{\text{opp}}{\text{adj}}$

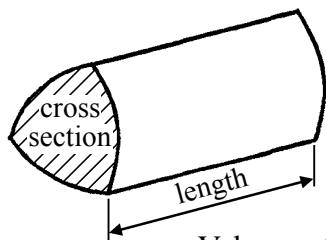
In any triangle ABC



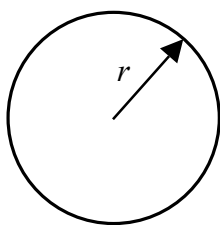
Sine rule: $\frac{a}{\sin A} = \frac{b}{\sin B} = \frac{c}{\sin C}$

Cosine rule: $a^2 = b^2 + c^2 - 2bc \cos A$

Area of triangle = $\frac{1}{2} ab \sin C$



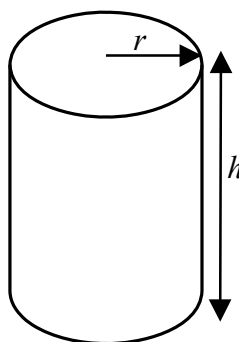
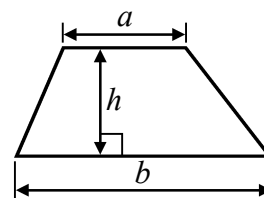
Volume of prism = area of cross section \times length



Circumference of circle = $2\pi r$

Area of circle = πr^2

Area of a trapezium = $\frac{1}{2} (a + b)h$



Volume of cylinder = $\pi r^2 h$

Curved surface area of cylinder = $2\pi r h$

The Quadratic Equation
The solutions of $ax^2 + bx + c = 0$,
where $a \neq 0$, are given by

$$x = \frac{-b \pm \sqrt{b^2 - 4ac}}{2a}$$



Leave
blank

Answer ALL TWENTY ONE questions.

Write your answers in the spaces provided.

You must write down all stages in your working.

1. The table shows information about the numbers of children in 25 families.

Number of children in the family	Frequency
1	4
2	9
3	8
4	0
5	4

Work out the mean number of children in these 25 families.

.....
Q1

(Total 3 marks)

3

Turn over



Leave
blank

2. (a) Expand

(i) $4(c - 3)$

.....
(1)

(ii) $d(d^2 + 4)$

.....
(2)

(b) Factorise $3x - 2x^2$

.....
(2)

(Total 5 marks)

Q2



Leave
blank

3. ABC is an isosceles triangle.
 $BA = BC$.
 PA is parallel to BC .
Angle $ACB = 70^\circ$.

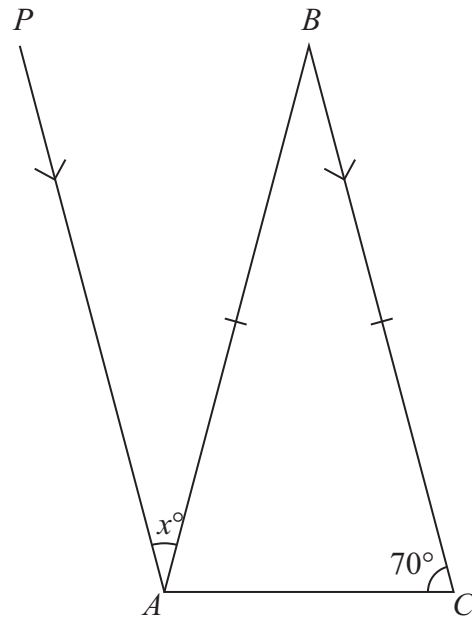


Diagram **NOT**
accurately drawn

Find the value of x .
Give a reason for each step in your working.

$x = \dots\dots\dots$

(Total 4 marks)

Q3



Leave
blank

4.

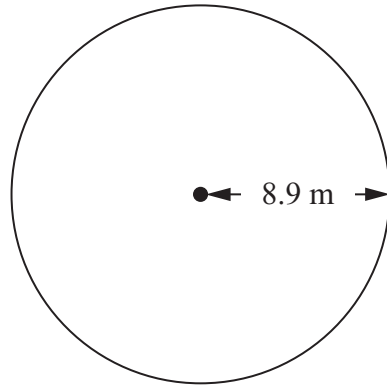


Diagram **NOT**
accurately drawn

A circular pond has radius 8.9 m.

- (a) Find the area of the pond.
Write down all the figures on your calculator display.
State the units of your answer.

..... (3)

- (b) Give the value of your area correct to 2 significant figures.

..... (1)

(Total 4 marks)

Q4



Leave
blank

5. (a) Show that $\frac{6}{7} \div 4 = \frac{3}{14}$

(2)

(b) Show that $3\frac{2}{5} - 1\frac{2}{3} = 1\frac{11}{15}$

(3)

Q5

(Total 5 marks)

7

Turn over



Leave
blank

6. (a) Solve $7x + 3 = 2x - 4$

$x = \dots\dots\dots$
(3)

(b) Solve $\frac{16 - 5y}{3} = 2$

$y = \dots\dots\dots$
(3)

(Total 6 marks)

Q6



Leave
blank

7. $\mathcal{E} = \{\text{Clothes}\}$
 $A = \{\text{Mr Smith's clothes}\}$
 $B = \{\text{Hats}\}$
 $C = \{\text{Mrs Koshi's hats}\}$

(a) (i) Describe the members of the set $A \cap B$

.....

(ii) How many members has the set $A \cap C$?

.....
(2)

(b)

A	B	C	\mathcal{E}	ϵ	\emptyset	\cap	\cup
-----	-----	-----	---------------	------------	-------------	--------	--------

Use a letter or symbol from the box to make each of the following a true statement.

(i) $B \cup C = \dots\dots\dots$

(ii) Mr Smith's favourite shirt $\dots\dots\dots A$

(2)

Q7

(Total 4 marks)



8. (a)

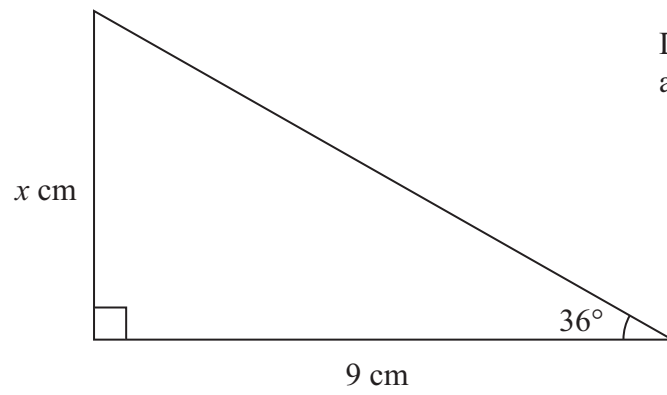


Diagram NOT accurately drawn

Calculate the value of x .
Give your answer correct to 3 significant figures.

$x = \dots\dots\dots$
(3)

(b)

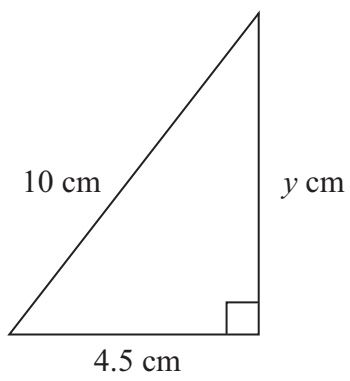


Diagram NOT accurately drawn

Calculate the value of y .
Give your answer correct to 3 significant figures.

$y = \dots\dots\dots$
(3)

(Total 6 marks)

Q8



Leave
blank

9. (a) Three positive whole numbers are all different.
They have a median of 5 and a mean of 4
Find the three numbers.

.....
(2)

- (b) Find four whole numbers which have a mode of 5 and a median of 6

.....
(2)

(Total 4 marks)

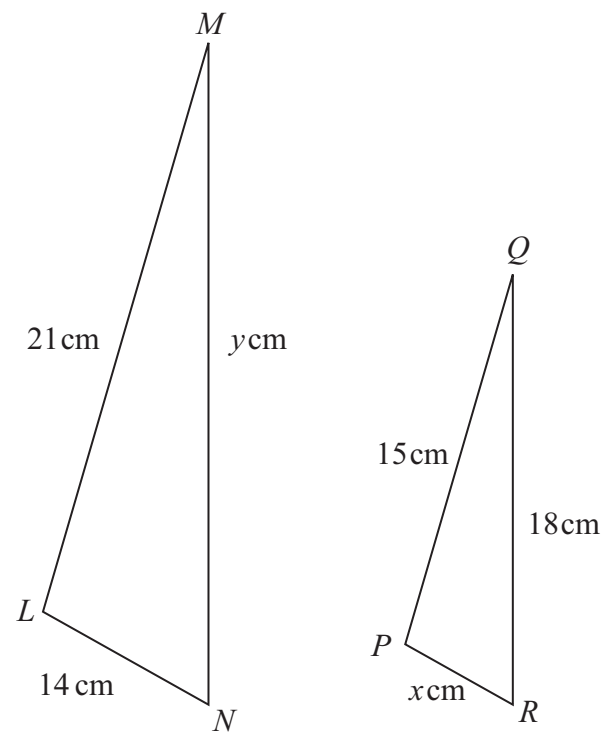
Q9

11

Turn over



10. Here are two similar triangles.



Diagrams **NOT** accurately drawn

LM corresponds to PQ .
 MN corresponds to QR .

(a) Find the value of x .

$x = \dots\dots\dots$
(2)

(b) Find the value of y .

$y = \dots\dots\dots$
(2)

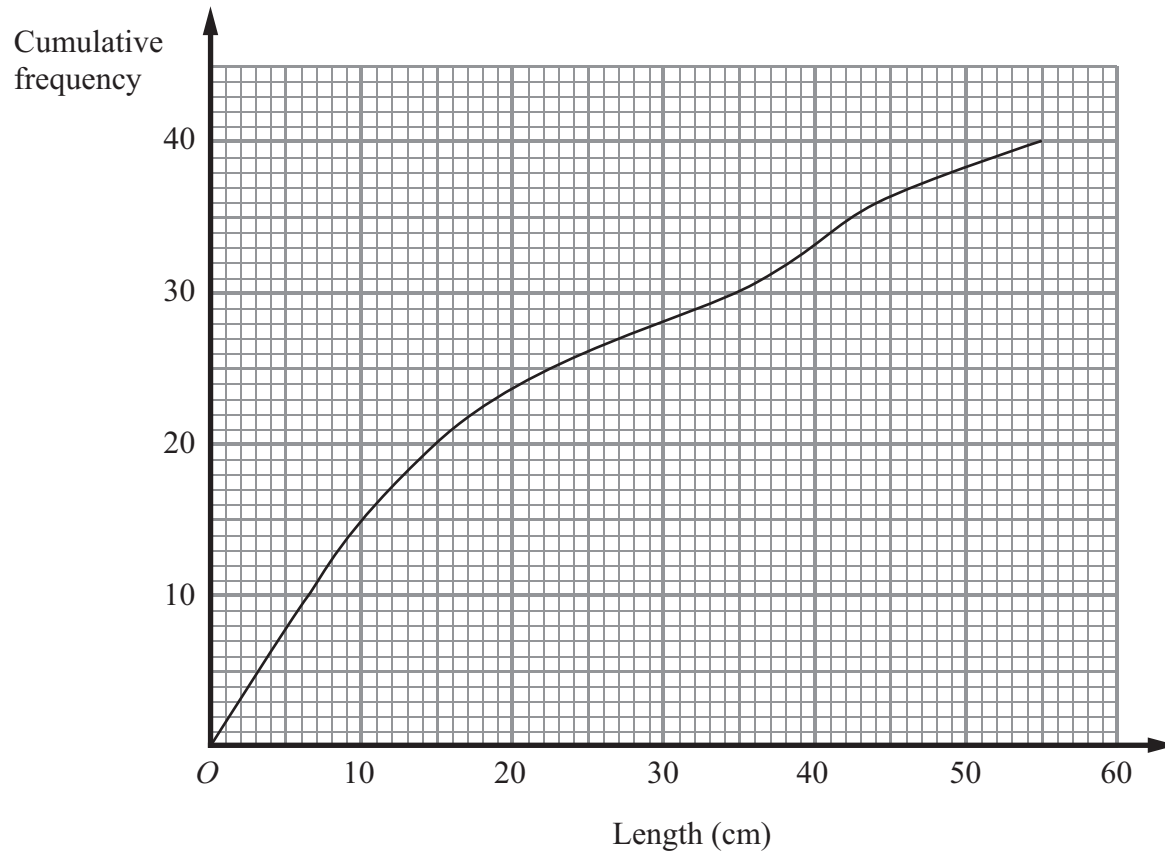
(Total 4 marks)

Q10



Leave blank

11. The cumulative frequency graph gives information about the lengths of 40 tree branches.



(a) Find an estimate for the median length.

..... cm
(2)

(b) Find an estimate for the interquartile range of the lengths.

..... cm
(2)

(c) Find an estimate for the number of branches with lengths of more than 44 cm.

.....
(1)

(Total 5 marks)

Q11

13

Turn over



H 3 7 7 7 0 A 0 1 3 2 4

Leave
blank

12. Solve the simultaneous equations

$$\begin{aligned}2x - 5y &= 13 \\6x + 3y &= 3\end{aligned}$$

$x = \dots\dots\dots$

$y = \dots\dots\dots$

(Total 3 marks)

Q12

13. (a) Factorise $x^2 - 8x + 15$

$\dots\dots\dots$

(2)

(b) Factorise $x^2 - 49$

$\dots\dots\dots$

(1)

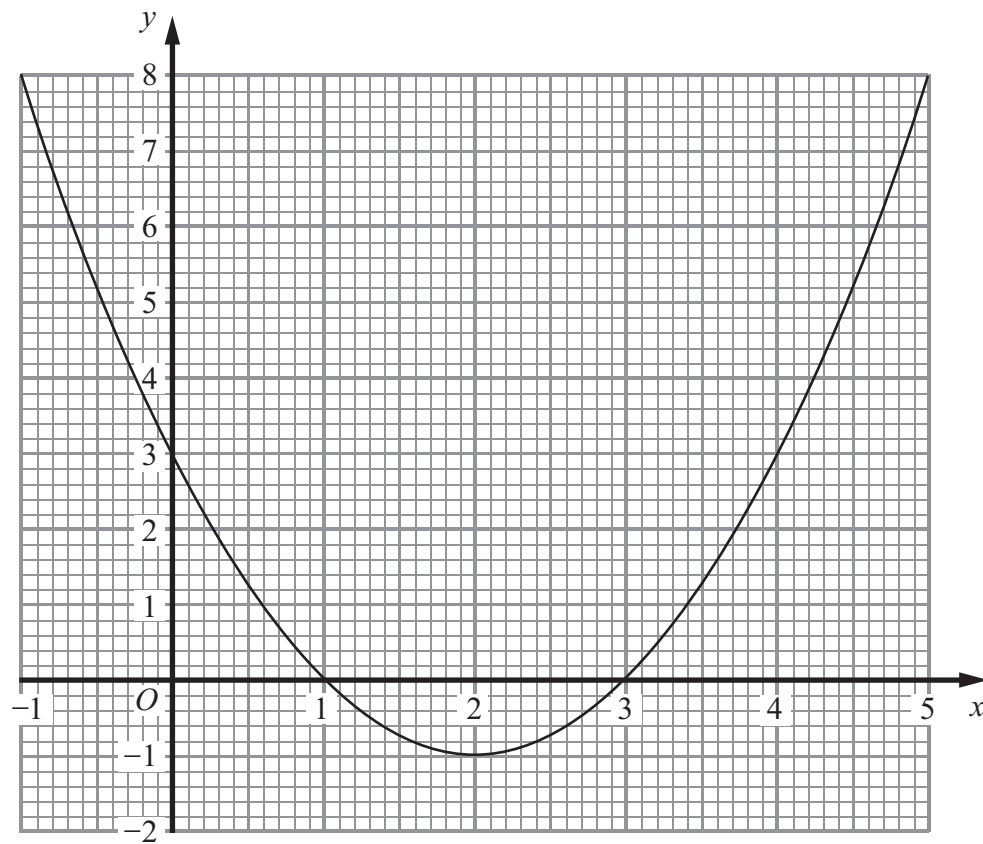
(Total 3 marks)

Q13



Leave
blank

14. The diagram shows the graph of $y = x^2 - 4x + 3$ for $-1 \leq x \leq 5$



(a) Use the graph to solve the equation $x^2 - 4x + 3 = 2$

.....
(2)

(b) By drawing a suitable straight line on the diagram,
solve the equation $x^2 - 4x + 3 = x + 1$

.....
(3)

(Total 5 marks)

Q14

15

Turn over



H 3 7 7 7 0 A 0 1 5 2 4

Leave blank

15. A solid is made from a cylinder and a hemisphere.
The cylinder has radius 1.5 cm and height 4 cm.
The hemisphere has radius 1.5 cm.

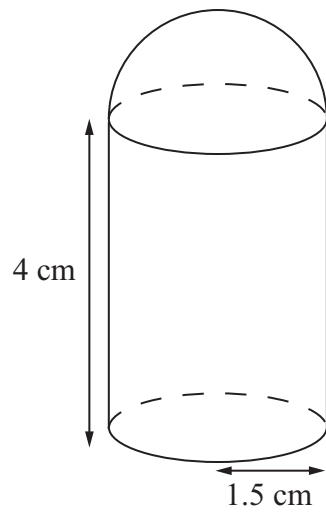


Diagram **NOT** accurately drawn

Work out the total volume of the solid.
Give your answer correct to 3 significant figures.

..... cm³

Q15

(Total 5 marks)



Leave
blank

16. A curve has equation $y = x^3 + 3x^2 - 24x$

(a) Find $\frac{dy}{dx}$

.....
(3)

(b) Find the coordinates of the turning points of the curve.

.....
(5)

Q16

(Total 8 marks)


17

Turn over



Leave
blank

17. Here is a fair dice.



It has six faces numbered 1, 2, 3, 4, 5 and 6
The dice shows a score of 6

Hari throws the dice three times.

(a) Work out the probability that the sum of the scores is 3

.....
(2)

(b) Work out the probability that the dice shows a score of 1 on exactly one of the three throws.

.....
(3)

(Total 5 marks)

Q17



18. Make x the subject of $P = \frac{100(y-x)}{x}$

Leave
blank

$x = \dots\dots\dots$

(Total 4 marks)

Q18



Leave blank

19.

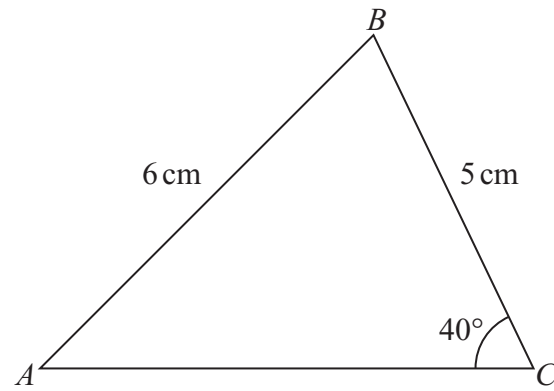


Diagram **NOT** accurately drawn

Calculate the area of triangle *ABC*.
Give your answer correct to 3 significant figures.

..... cm²

(Total 6 marks)

Q19



Leave
blank

20. (a) Write $\frac{1}{16}$ as a power of 2

.....
(2)

(b) Write 2 as a power of 8

.....
(2)

(c) Rationalise the denominator of $\frac{a+\sqrt{a}}{\sqrt{a}}$ where a is a prime number.
Simplify your answer as much as possible.

.....
(2)

(Total 6 marks)

Q20

21

Turn over



H 3 7 7 7 0 A 0 2 1 2 4

Leave
blank

21. (a) $f(x) = 2x + 1$

Express the inverse function f^{-1} in the form $f^{-1}(x) = \dots$

$$f^{-1}(x) = \dots \quad (2)$$

(b) $g(x) = 2 + x$
 $h(x) = x^2$

Solve the equation $hg(x) = h(x)$.

$$x = \dots \quad (3)$$

Q21

(Total 5 marks)

TOTAL FOR PAPER: 100 MARKS

END



BLANK PAGE



BLANK PAGE

